

2803/304

**PATTERN CONSTRUCTION III  
AND GRADING TECHNIQUES II  
PRACTICAL**

Oct./Nov. 2022

Time: 4 hours



**THE KENYA NATIONAL EXAMINATIONS COUNCIL**

**DIPLOMA IN FASHION DESIGN AND CLOTHING TECHNOLOGY  
MODULE III**

**PATTERN CONSTRUCTION III AND GRADING TECHNIQUES II PRACTICAL**

**4 hours**

**INSTRUCTIONS TO CANDIDATES**

1. *You should have the following items for this examination:*
  - (i)  $\frac{1}{4}$  scale ruler/metric square;
  - (ii) pencil (2H) and sharpener;
  - (iii) eraser;
  - (iv) 30 cm ruler;
  - (v) French curves;
  - (vi) sheets of white photocopying paper (size A4);
  - (vii) a pair of paper scissors;
  - (viii) glue/sellotape;
  - (ix) paper pins;
  - (x) tracing wheel;
  - (xi) tracing paper;
  - (xii) calculator.
  
2.
  - (i) *All stages of pattern development must be clearly shown.*
  - (ii) *All measurements used for grading must be shown at all grading points.*

**This paper consists of 4 printed pages.**

**Candidates should check the question paper to ascertain that all the pages are printed as indicated and that no questions are missing.**

**TASKS**

1. Using the measurements provided, draft the classic gents' shirt block. (40 marks)

**Measurements**

Neck size	42 cm
Chest	106 cm
Scye depth	25 cm
Natural waist length	46 cm
Half back	21 cm
Shirt length	88 cm

2. Trace out the bodice and sleeve blocks provided and develop final patterns for the dress style sketched below. (93 marks)
3. Trace out the gents' trouser block provided and grade one size up. (27 marks)



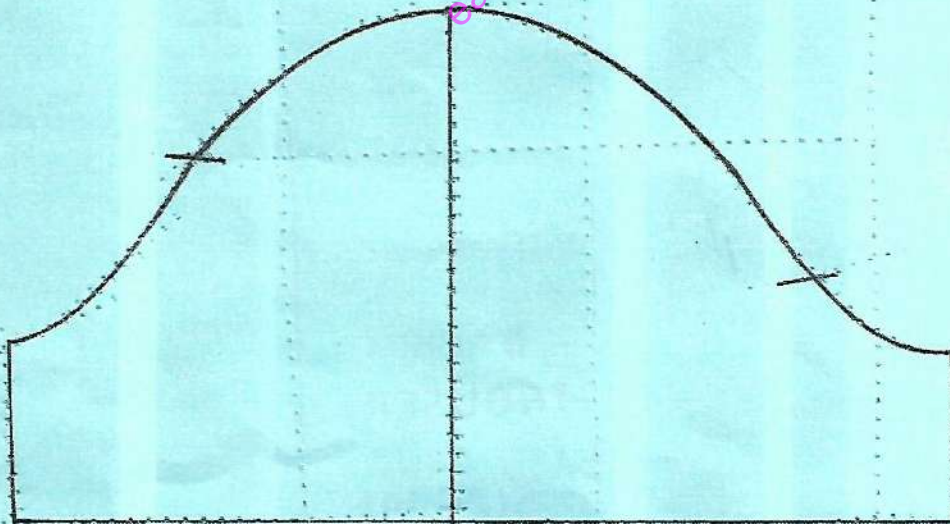
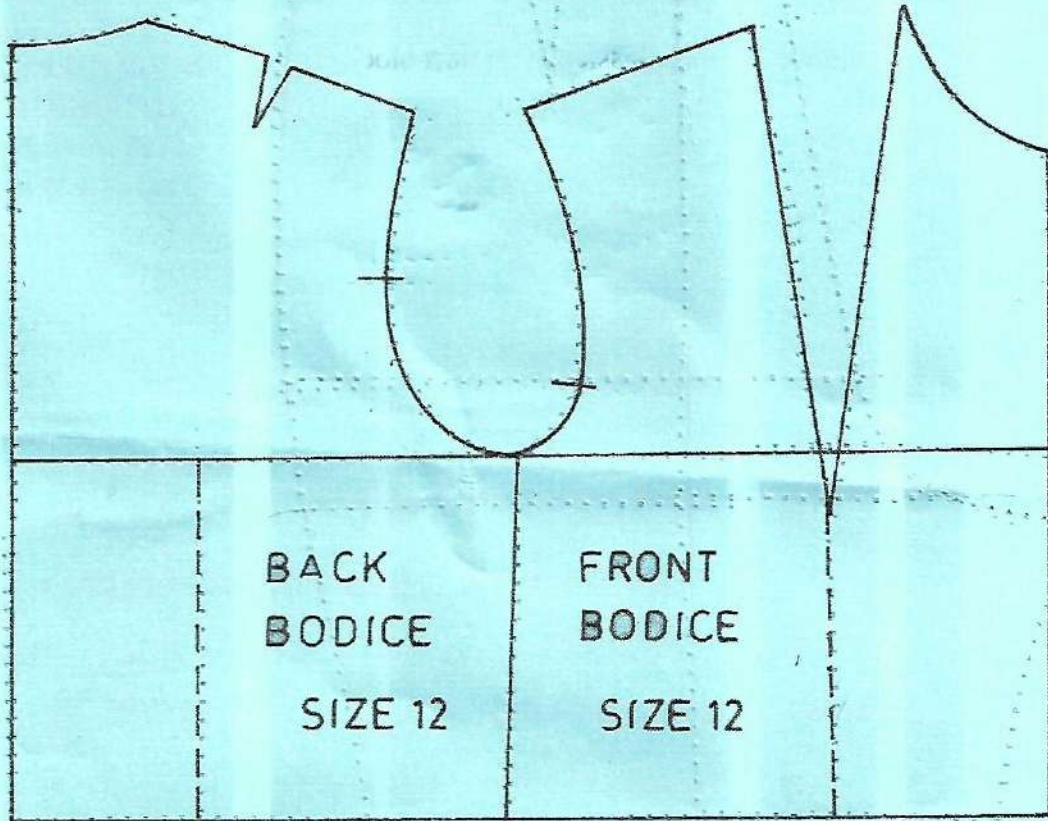
FRONT VIEW

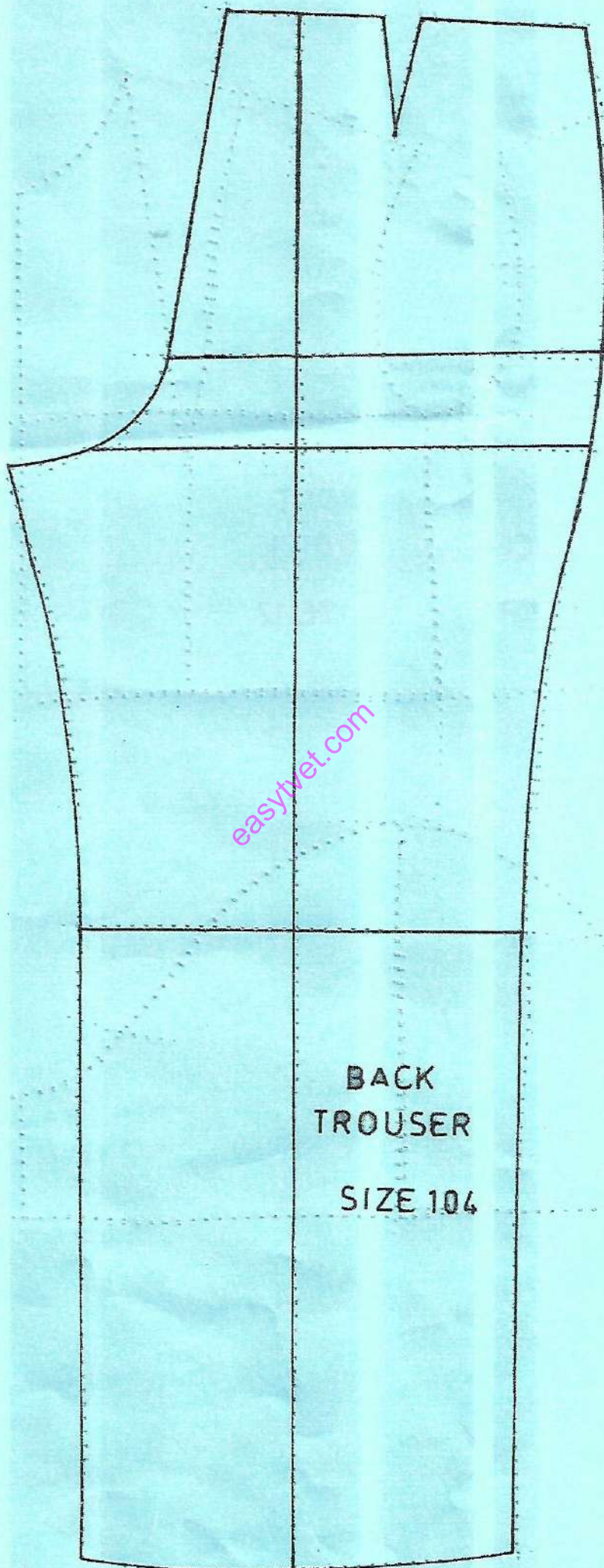
BACK VIEW

**Measurements**

Sleeve length	-	60 cm
Flounce depth at sides-		18 cm

Dress length	-	100 cm
Waist to hip	-	21 cm





BACK  
TROUSER  
SIZE 104